


# FOOD ITEMS







# SCALES



Bathroom Digital Scale



Digital kitchen scale



Kitchen Analogue Scale


Grade2: Geometry and Measures: Weight Measures - Materials



Two-arms Plate Scale

Weights: 1Kg; 1/2Kg; 200g; 50g; 10g

Scales made of recycled material



Wire hanger; 2 clips and two strands of cotton wire of exactly the same size



Two reused boxes, a strip of cardboard and an empty water bottle and glue.

















	MY PREDICTION ONLY BY ESTIMATE	WHAT I CHECK USING MY HANDS	I CHECK WITH THE SCALE
	<u>WHICH WEIGHS THE MOST AND LEAST</u>	<u>WHICH WEIGHS THE MOST AND LEAST</u>	<u>WHICH WEIGHS THE MOST AND LEAST</u>
 Apple  Pear	The one weighs more is _____ The one that weighs less is _____	The one weighs more is _____ The one that weighs less is _____	The one weighs more is _____ The one that weighs less is _____
 Orange  Apple	The one weighs more is _____ The one that weighs less is _____	The one weighs more is _____ The one that weighs less is _____	The one weighs more is _____ The one that weighs less is _____
 Banana  Pear	The one weighs more is _____ The one that weighs less is _____	The one weighs more is _____ The one that weighs less is _____	The one weighs more is _____ The one that weighs less is _____
 Apple  Banana	The one weighs more is _____ The one that weighs less is _____	The one weighs more is _____ The one that weighs less is _____	The one weighs more is _____ The one that weighs less is _____
 Orange  Pear	The one weighs more is _____ The one that weighs less is _____	The one weighs more is _____ The one that weighs less is _____	The one weighs more is _____ The one that weighs less is _____
 Orange  Banana	The one weighs more is _____ The one that weighs less is _____	The one weighs more is _____ The one that weighs less is _____	The one weighs more is _____ The one that weighs less is _____
 Bread	The one weighs more is _____ The one that weighs less is _____	The one weighs more is _____ The one that weighs less is _____	The one weighs more is _____ The one that weighs less is _____

 Fig			
---------------------------------------------------------------------------------------	--	--	--



### SHOPPING LIST PREPARING THE SNACK

Items of food		Tick which product to buy	Quantity in Kg / gr
	Melon		
	Apple		
	Pear		
	Orange		
	Banana		
	Strawberry		
	Cheese		
	Fiambre		
	Bread		
Other:			
Other:			
Other:			



